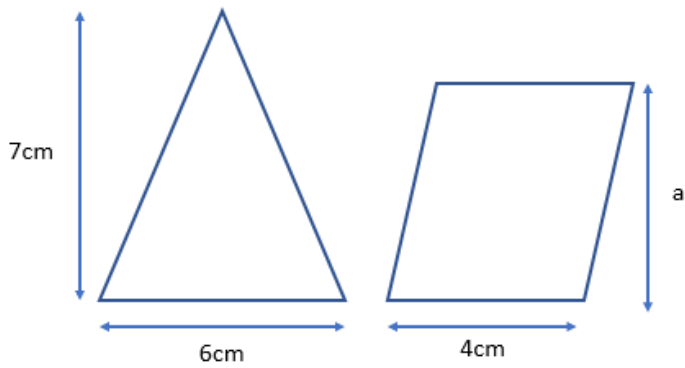


### Problem solving link ticket

CRAVEN MATHS

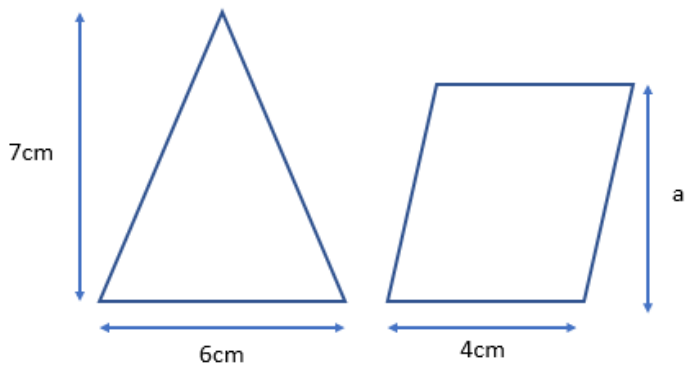
The shapes have the same area. Work out the value of  $a$ .



### Problem solving link ticket

CRAVEN MATHS

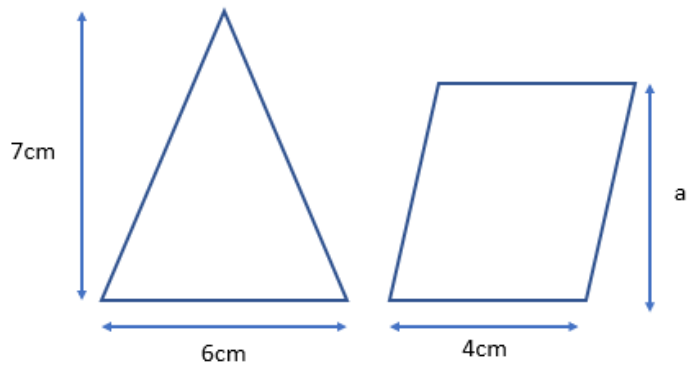
The shapes have the same area. Work out the value of  $a$ .



### Problem solving link ticket

CRAVEN MATHS

The shapes have the same area. Work out the value of  $a$ .



### Problem solving link ticket

CRAVEN MATHS

The shapes have the same area. Work out the value of  $a$ .

