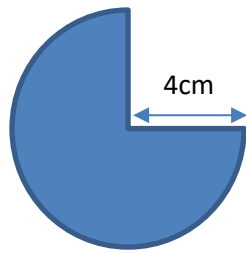


Problem solving ticket

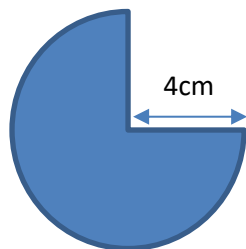
Work out the perimeter of the sector of the circle with a radius of 4cm.



Give your answer in terms of π

Problem solving ticket

Work out the perimeter of the sector of the circle with a radius of 4cm.



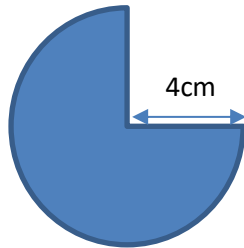
Give your answer in terms of π

Impactful Feedback Problem Pair

CRAVEN MATHS

I do

Work out the perimeter of the sector of the circle with a radius of 4cm.



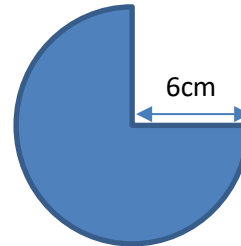
Give your answer in terms of π

You do

Work out the perimeter of the sector of the circles.

Give your answer in terms of π

a)



b)

